








SARASAS SUKSAWAD SCHOOL

Mathematics Grade 6

Prepared by: Mr. Jediemark

Name: _____ Grade: _____ No.: _____

Listening test

1.  a. Graph is a group that uses pictures or numbers to compare changing quantities.
b. Graph is a chart that uses pictures or numbers to compare changing quality.
c. Graph is a chart that uses pictures or numbers to compare changing quantities.
d. Graph is a chart that uses points or dots to compare changing quantities.
2.  a. In pictograms, numbers are used to represent the data.
b. In pictograms, pictures are used to represent the analytics
c. In pictograms, pictures are necessary to represent the data.
d. In pictograms, pictures are used to represent the data.
3.  a. A line graph is just a group of points joined up with straight lines.
b. A line graph is just a set of points joined up with straight lines.
c. A line graph is just a set of points joined up with curved lines.
d. A line graph is just a set of lines joined up with straight lines.
4.  a. Bar charts show everything at a glance without looking a lot of numbers.
b. Bar charts show things at a glance without asking a lot of numbers.
c. Bar charts show things at a glance without looking a lot of letters
d. Bar charts show things at a glance without looking a lot of numbers.
5.  a. Pie charts show things in proportions.
b. Pie charts need things in proportions.
c. Pie charts show things in propaganda
d. Pie charts showing things in proportions.

Writing test

Write the examples of **Solid shapes** and **Plane shapes** in the boxes

Plane shapes	Solid Shapes
1.	1.
2.	2.
3.	3.
4.	4.
5.	5.