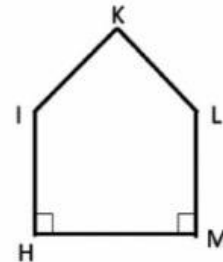
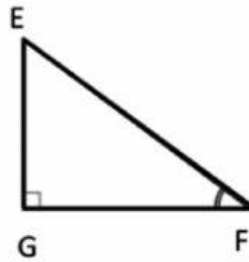
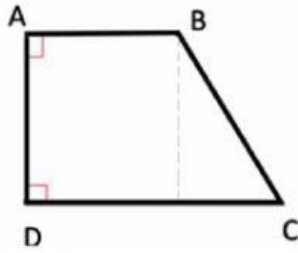




UNIT 7: LINES AND ANGLES

Revision

1. Look at these shapes.

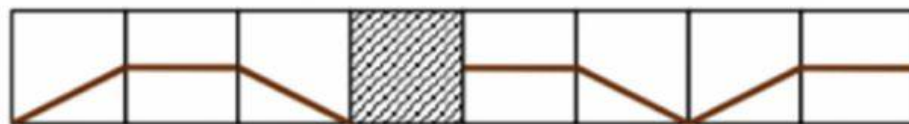


Complete each of these statements, using **perpendicular** or **parallel**.

- AB is to CD.
- AB is to AD.
- EG isto GF.
- IH is to LM.

2. (IKMC 2014)

Which tile must be in the shaded square so that the line is connected?



A

B

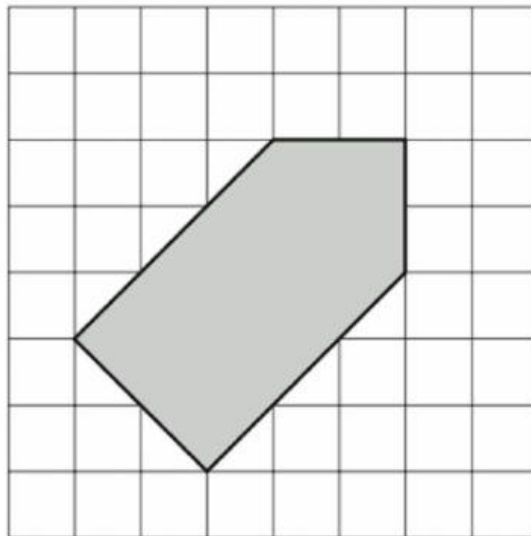
C

D

E



- How many right angles in this pentagon? _____
 How many acute angles in this pentagon? _____
 How many obtuse angles in this pentagon? _____



4. Put these angles in order of size, starting with the largest.



.....

.....

.....

.....

Largest

Smallest