



Name: .....

Class: 3.....











Date: .....

Unit 6 - Why do we use numbers every day?

**GRAMMAR REVIEW**

\*\*\*

**1 Choose the correct answer**

	<p>1. Mark is eating.....pizza now.</p> <p>a. a loaf of                      b. a cup of                      c. a slice of</p>
	<p>2. My mom bought.....chocolate for me.</p> <p>a. a bar of                      b. a bottle of                      c. a bowl of</p>
	<p>3. Ann drank.....hot chocolate last night.</p> <p>a. a can of                      b. a cup of                      c. a bag of</p>
	<p>4. My father ate.....cake on his birthday.</p> <p>a. a piece of                      b. a pair of                      c. a packet of</p>
	<p>5. Suzy usually has.....cereal for breakfast.</p> <p>a. a glass of                      b. a box of                      c. a bowl of</p>
<p>6. Which clock shows "<i>half past one</i>"?</p> <p>a.                       b.                       c. </p>	
	<p>7. <b>2:15</b> is.....</p> <p>a. half past two</p> <p>b. quarter after two</p> <p>c. quarter to three</p>
	<p>8. What's the time?</p> <p>a. It's quarter after three</p> <p>b. It's half past three</p> <p>c. It's quarter till four</p>



9. The purple hand on the clock shows the .....

a. hour

b. second

c. minute



10. Choose the correct time

a. eight o'clock

b. eight fifteen

c. eight thirty

