



Sarasas Witaed Chonburi School

Bilingual Programme – Term 2/ 2021

Week 16 – Feb. 14 to 18, 2022

Name: _____

KG: 3 / _____

Subject: **Mathematics**

Student Number: _____

Directions: Answer the word problems below.

1. Nisa has fifteen candies. She gave five to Nok. How many candies are left?

Nisa's candies



Candies given to Nok




Candies left

$$\begin{array}{r} \square \\ \hline \square \\ \hline \hline \end{array}$$


There are candies left.


2. Hmiw bought twelve ice-creams. Tuck ate four ice-creams. How many ice-creams are left?

Hmiw's ice-creams



Ice-creams Tuck ate

Ice-creams left

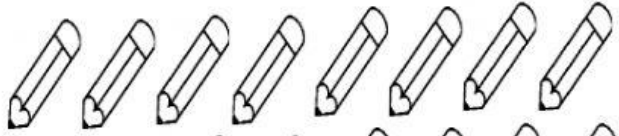
$$\begin{array}{r} \square \\ \hline \square \\ \hline \hline \end{array}$$


There are ice-creams left.

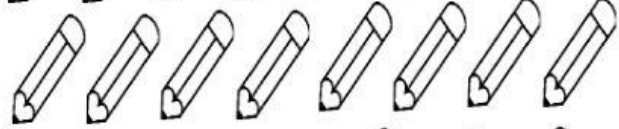
3. Pam has twenty pencils. She loses eight pencils. How many pencils are left?

Pam's pencils

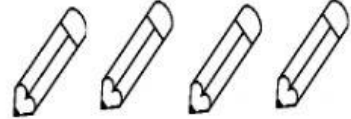
-



Pencils lost



Pencils left




There are pencils left.

4. Mi has seven balloons. Three of the balloons burst. How many balloons are left?

Mi's balloons

-



Balloons that burst

Balloons left

There are balloons left.

Subtraction

