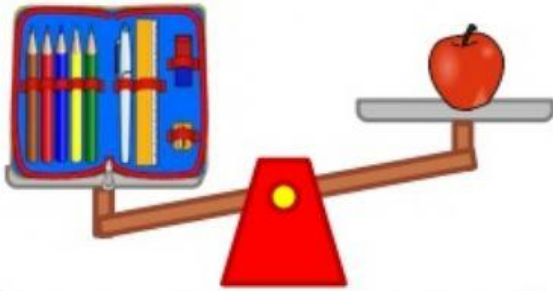
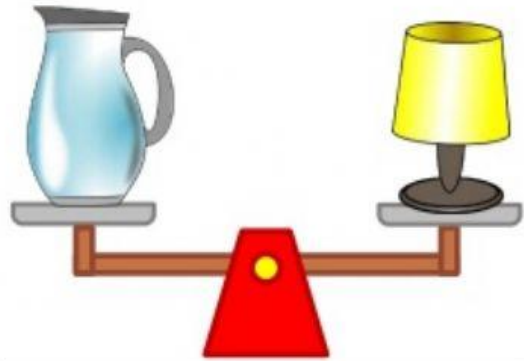


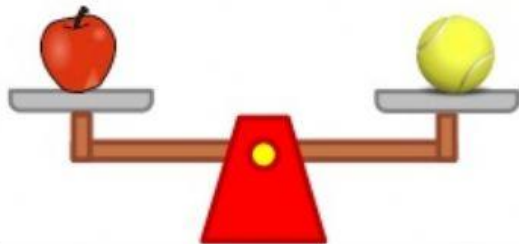
Look at the following scales and fill in the blanks with "heavier than", "lighter than" or "the same as".



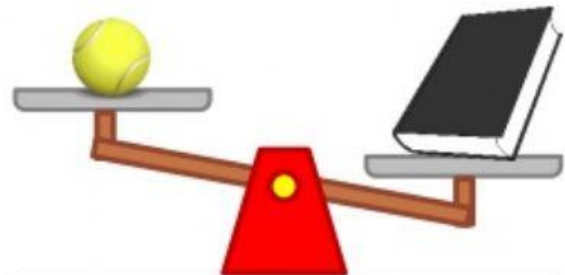
The pencil case weighs  
\_\_\_\_\_ the apple.



The pitcher weighs  
\_\_\_\_\_ the lamp.



The tennis ball weighs  
\_\_\_\_\_ the apple.



The tennis ball weighs  
\_\_\_\_\_ the book.



The lamp weighs  
\_\_\_\_\_ the book.



The pencil case weighs  
\_\_\_\_\_ the book.

Which one is heavier: pitcher or pencil case?

\_\_\_\_\_

Which one is lighter: book or apple?

\_\_\_\_\_  **LIVEWORKSHEETS**