







Mathematics Weekly Test

Name:

No.	Questions	Marks
1.	<p>How many objects are there?</p>  <p>Answer</p>	1
2.	<p>Write in words:</p> <p>7</p> <p>8</p> <p>11</p>	3
3.	<p>Write in the missing numbers.</p> <p>9, 11, 13, , , ,17,</p>	1
4.	<p>Write how many objects there are in each set.</p>   	3

5.	<p>Select eleven of the objects.</p> 	1
6.	<p>Write the numeral for:</p> <p>Eleven</p> <p>Thirteen</p> <p>Nineteen</p> <p>Three</p>	4
7.	<p>How many more balls are needed to make 17?</p>  <p>Answer</p>	1
8.	<p>Alex had 9 plums. Ann gave him 7 more plums. How many plums did he have in all?</p> <p style="text-align: center;">+ =</p>	2
9.	<p>Billy had 6 marbles. He won 13 more in a game. How many marbles does he have in all?</p> <p style="text-align: center;">+ =</p>	2
10.	<p>Complete the statements.</p> <p>a) $6 + \quad = 11$</p> <p>b) 11 plus 7 equals</p>	2

	The End	20
--	---------	----