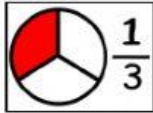
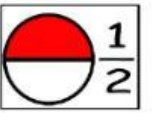
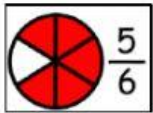
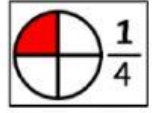
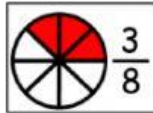
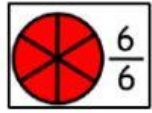
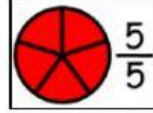
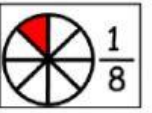
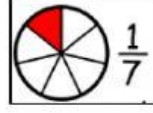
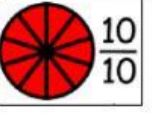

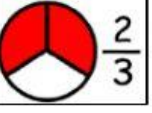
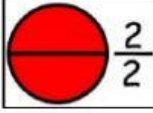


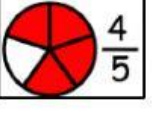

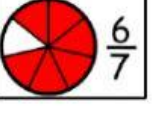


NAME: _____

Mathematics

Name That Fraction





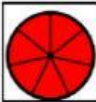

Write the word name of each fraction.

 $\frac{1}{3}$		 $\frac{1}{2}$	
 $\frac{5}{6}$		 $\frac{1}{4}$	
 $\frac{3}{8}$		 $\frac{6}{6}$	
 $\frac{5}{5}$		 $\frac{1}{8}$	
 $\frac{1}{7}$		 $\frac{10}{10}$	
 $\frac{1}{9}$		 $\frac{2}{3}$	
 $\frac{2}{2}$		 $\frac{9}{9}$	
 $\frac{2}{4}$		 $\frac{4}{5}$	
 $\frac{9}{10}$		 $\frac{6}{7}$	

Select the correct word name of each fraction.

	one-tenths	one-tenth	one-ninth
	two-ninth	seven-ninths	nine-sevenths
	one-fifths	four-fifth	one-fourths
	three-three	one-third	three-thirds
	one-fifth	one-fifths	one-sixth
	four-ninths	four-ninth	four-nineths

Drag and drop each fraction in the box next to its name.

		<div></div>	four-fourths	<div></div>	eight-eighths
		<div></div>	two-sixths	<div></div>	seven-sevenths
		<div></div>	three-ninths	<div></div>	three-sixths