
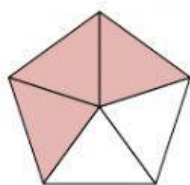


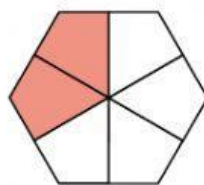
1 SCRIVI LA FRAZIONE



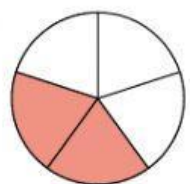
| |
|---------------|
| $\frac{4}{5}$ |
|---------------|



| |
|-------|
| _____ |
|-------|



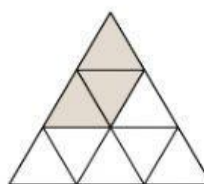
| |
|-------|
| _____ |
|-------|



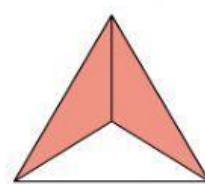
| |
|-------|
| _____ |
|-------|



| |
|-------|
| _____ |
|-------|



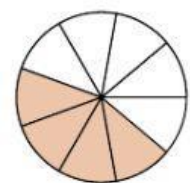
| |
|-------|
| _____ |
|-------|



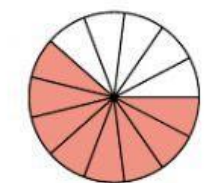
| |
|-------|
| _____ |
|-------|



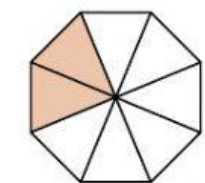
| |
|-------|
| _____ |
|-------|



| |
|-------|
| _____ |
|-------|



| |
|-------|
| _____ |
|-------|



| |
|-------|
| _____ |
|-------|