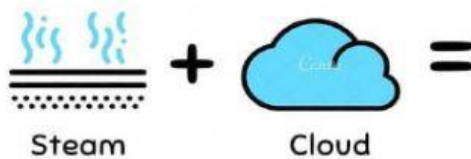



HOW CAN WATER CHANGE?

Select the name of the change represented in each picture.



Tick the best option to represent each state of matter.



solid

liquid

gas

☐☐☐

solid

liquid

gas



☐☐☐

solid

liquid

gas

☐☐☐

 air inside	solid <input type="checkbox"/>	liquid <input type="checkbox"/>	gas <input type="checkbox"/>
 juice	solid <input type="checkbox"/>	liquid <input type="checkbox"/>	gas <input type="checkbox"/>