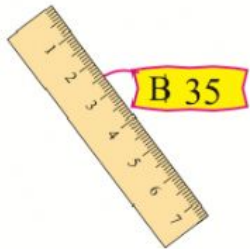




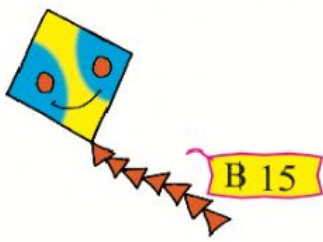
















Find the difference in the cost of each set of items.

	Items	Difference
1.	 	$\begin{array}{r} \text{B } 35 \\ - \text{B } 12 \\ \hline \text{B } 23 \end{array}$
2.	 	$\begin{array}{r} \text{B } 70 \\ - \text{B } 25 \\ \hline \end{array}$
3.	 	$\begin{array}{r} \\ - \\ \hline \end{array}$
4.	 	$\begin{array}{r} \\ - \\ \hline \end{array}$
5.	 	$\begin{array}{r} \\ - \\ \hline \end{array}$

How much will you get back as change?

Objects	Given money	Get change
1.  B 45		<div>B 50</div> <div><div>- B 45</div><div>B 5</div></div>
2.  B 40		<div></div> <div><div></div></div> <div></div>
3.  B 33		<div></div> <div><div></div></div> <div></div>
4.  B 15		<div></div> <div><div></div></div> <div></div>
5.  B 40		<div></div> <div><div></div></div> <div></div>