
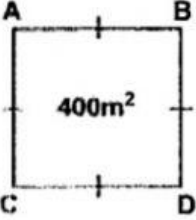


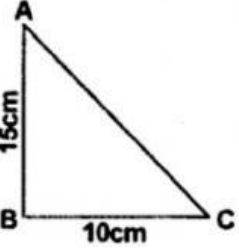
Name: _____

Measurement- Area & Perimeter Review



1. MNOP is a rectangle. MN is 9cm, MO is 6cm. What is the area of the rectangle? _____ cm²

2.  The figure shows a square plot with an area of 400m². What is the length of AB? _____ m

3.  Find the area of the triangle shown if AB is 15cm and BC is 10cm. _____ cm

4. The area of a square is 81cm². What is the perimeter of this square? _____ cm