


Measuring Length

Write the correct length.



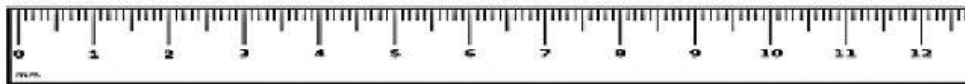
Caterpillar _____ cm



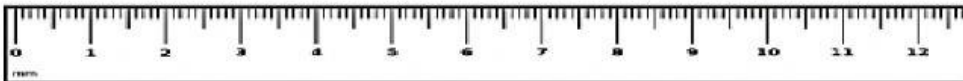
Toy car _____ cm




Water Bottle _____ cm



Soda _____ cm



1. What equation can you write to compare the lengths? Fill in the numbers.



13 meters
8 meters



_____ - _____ = _____

The boat is _____ meters _____ than the truck.