

Name: \_\_\_\_\_

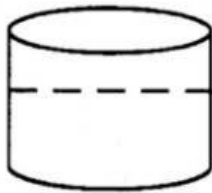
## Mathematics

1. In a spelling test Mary scored 16 out of 25 correct. What percent did she get wrong?

\_\_\_\_\_

2. A square sheet of paper has an area of  $36\text{cm}^2$ . What is the length in cm of one of its sides?

\_\_\_\_\_ cm



3. The container below is 75% full. If it can hold 36L how many litres of water are needed to fill it?

\_\_\_\_\_ litres

4. Multiply 1.2 by .004

\_\_\_\_\_

5. Sharon and Tiana shared candies between themselves. Every time Tiana gets 3 candies Sharon gets 2. How many candies does Sharon get if Tiana receives 18?

\_\_\_\_\_

6. Mr. Morgan got a 25% discount when he purchased a television set for \$600.00. How much money did he save on his purchase?

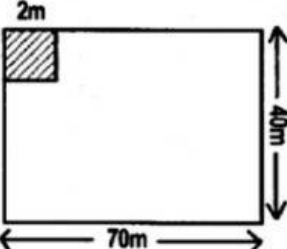
\$ \_\_\_\_\_

7. If 20% of a number is 15, what is the number?

\_\_\_\_\_

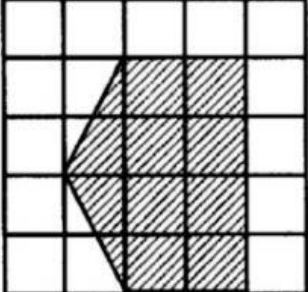
8. A square has a length of 15cm. What is its perimeter?

\_\_\_\_\_ cm

9.  How many square tiles two metres in width are needed to cover the floor shown on the left?

\_\_\_\_\_

The area of each square below is  $2\text{cm}^2$ . What is the area of the shaded squares in the diagram below?

10.  \_\_\_\_\_  $\text{cm}^2$