

KENDRIYA VIDYALAYA MEGHAHATUBURU, JHARKHAND

Class – 4 C









Topic – Measurement of Weights

Subject – Maths

Subject Teacher's Name – Sunil Kumar Rai

Match the following Weights

If one blue book weighs 300 g and red book weighs 700 g, then what will be the weight of the following things ?

- (a)  =  **600 g**
- (b)  =  **1 kg 700 g**
- (c)  =  **3 kg 800 g**
- (d)  =  **6 kg 600g**

Choose the suitable Weights

(i) 5 kg. = _____ g

- a. 500 b. 5 c. 5000 d. 50000

(ii) 8 kg 750 g = _____ g

- a. 87500 b. 80750 c. 87050 d. 8750