

# Recognizing Numbers

Answer the following questions below.

- 1.) Which one of the following list show the numbers decreasing each time?

a	601, 600, 610
b	600, 610, 600
c	600, 601, 610
d	610, 601, 600

- 2.) These are the numbers on four license plates.

Which license plate includes the number 7?





a	P1423
b	S8056
c	T79
d	L200

- 3.) Which one of the following list show the numbers increasing each time?

a	502, 500, 520
b	500, 520, 500
c	500, 502, 520
d	520, 502, 500

- 4.) The diagrams shows four shapes.

The number in shape c is

a	b	c	d
			

a	40
b	45
c	405
d	450

5.) Some students received these scores for their exams.

33, 65, 49, 88, 94

Which is the second lowest score?

a	33
b	49
c	65
d	88


6.) These are the numbers on four lotto tickets.

Ticket a	2	10	23	42	50	55
Ticket b	4	8	11	34	44	54
Ticket c	6	28	35	39	56	59
Ticket d	1	22	28	41	43	58

Which ticket has the number 56?

a	Ticket a
b	Ticket b
c	Ticket c
d	Ticket d

7.) The diagram shows street signs.

a	b	c	d
			

a.) The number on sign d is

a	421
b	220
c	70
d	29

8.) Some children receive their scores from a tests.




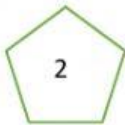
55, 40, 68, 91, 83

Which is the second highest score?

a	40
b	55
c	68
d	83

9.) The diagram shows four shapes

The number in shape b

a	b	c	d
			

a	2
b	20
c	202
d	220

10.) These are the times for four runners

400 metres – Results	
	Time
Joseph	2 mins 20 secs
Matthews	2 mins 19 secs
Smith	2mins 24 secs
Jones	2mins 30 secs

The third fastest time was

a	2 mins 20 secs
b	2 mins 19 secs
c	2mins 24 secs
d	2mins 30 secs

