

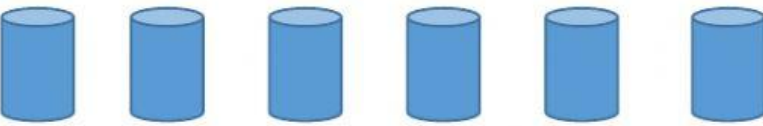




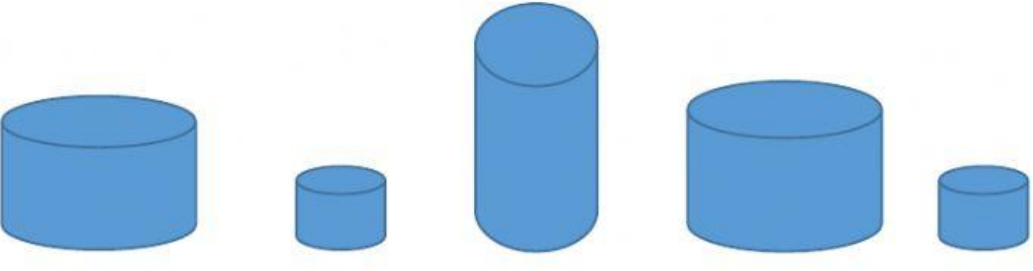








Mathematics Weekly Test

Name:

Answer all questions below.

No.	Question	Mrks
1.	<p>Write in the missing letters to spell the numbers:</p> <p>3 th e</p> <p>5 f v</p> <p>7 s v n</p> <p>10 t</p> <p>12 t lv</p> <p>13 th te n</p>	6
2.	<p>Write how many objects are in each set.</p>    	4
3.	Choose which set has more objects.	

	 	1														
4.	<p>Select the shapes which are the same</p> 	1														
5.	<p>Select the shapes with the same size</p> 	1														
6.	<p>Write number that comes after.</p> <table border="1" data-bbox="402 1473 1066 1787"> <thead> <tr> <th>Before</th> <th>After</th> </tr> </thead> <tbody> <tr> <td>7</td> <td></td> </tr> <tr> <td>3</td> <td></td> </tr> <tr> <td>4</td> <td></td> </tr> <tr> <td>10</td> <td></td> </tr> <tr> <td>14</td> <td></td> </tr> <tr> <td>12</td> <td></td> </tr> </tbody> </table>	Before	After	7		3		4		10		14		12		6
Before	After															
7																
3																
4																
10																
14																
12																

7.	<p>Match the solid shapes with their correct names.</p> <p>Cuboid Cone Cylinder</p> <div>    </div>	3
8.	<p>Match the flat shapes with their correct names.</p> <p>Triangle Circle Square</p> <div>    </div>	3
9.	<div> <div> 3 kites + 2 kites </div> <div> 2 boys + 8 boys </div> </div>	2
10.	<div> <div> 7 bags - 3 bags </div> <div> 8 fans - 5 fans </div> </div>	2

	The end	29
--	---------	----