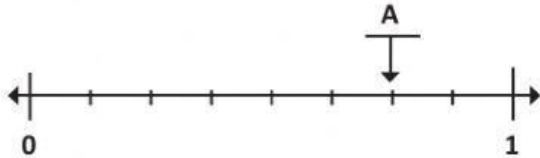
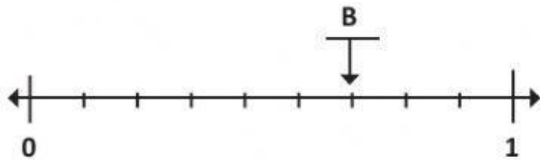


## Fracciones en la recta numérica

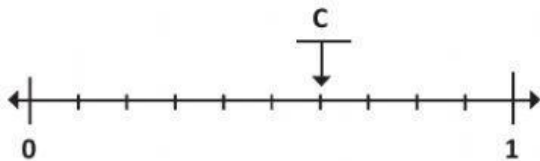
Identifica la fracción que señala la letra en cada recta numérica. Si es necesario, simplifica la fracción. Sigue el ejemplo



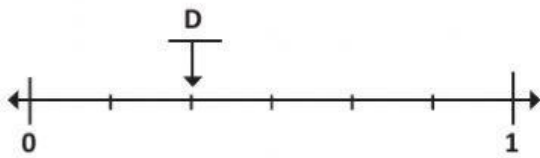
$$A = \frac{6}{8} = \frac{3}{4}$$



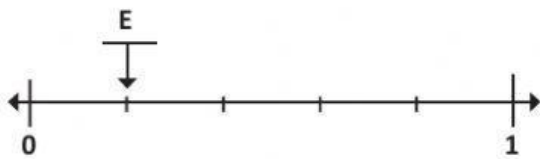
$$B = \frac{\quad}{\quad} = \frac{\quad}{\quad}$$



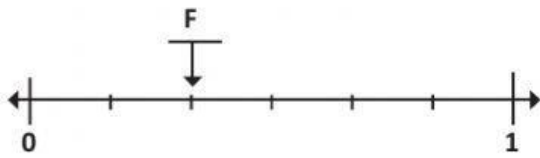
$$C = \frac{\quad}{\quad} = \frac{\quad}{\quad}$$



$$D = \frac{\quad}{\quad} = \frac{\quad}{\quad}$$



$$E = \frac{\quad}{\quad} = \frac{\quad}{\quad}$$



$$F = \frac{\quad}{\quad} = \frac{\quad}{\quad}$$