



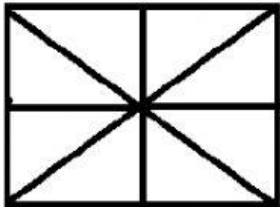
NMMS – MAT

GEOMETRICAL SHAPES

NAME :

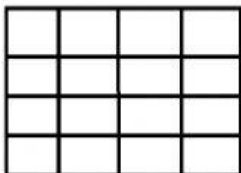
WORK SHEET : 8

1] *How many triangles are there ?*



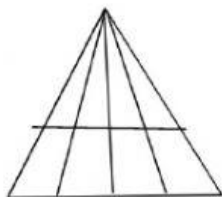
(A) 16 (B) 14 (C) 8 (D) 12

2] *How many squares are there in the figure ?*



(A) 16 (B) 17 (C) 26 (D) 30

3] *How many triangles are in the given figure?*



(A) 10 (B) 12 (C) 14 (D) 16

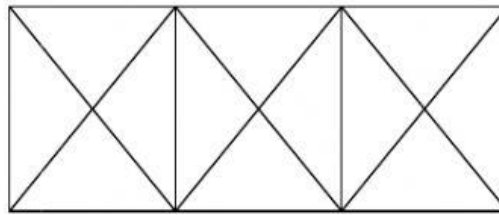
4] Find the number of triangles?

(A) 29

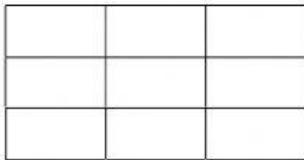
(B) 25

(C) 28

(D) 24



5] Find the number of rectangles?




(A) 19

(B) 28

(C) 27

(D) 36

6] Find the number of squares in the given figure.



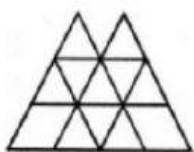
(A) 18

(B) 14

(C) 10

(D) 9

7] How many triangles are there in the following figure?




(A) 18

(B) 20

(C) 22


(D) 26

8] How many triangles are there in the following figure?




A) 26 B) 30 C) 36 D) 40

9] What is the minimum number of straight line segments used to form the following figure?



A) 36 B) 46 C) 66 D) 14

10] How many triangles are there?



A) 10 B) 40 C) 42 D) 54

