




You can compare lengths by subtracting the measurements to find the difference.

Measure each pencil and write a subtraction equation to compare them.



$$\boxed{} - \boxed{} = \boxed{}$$