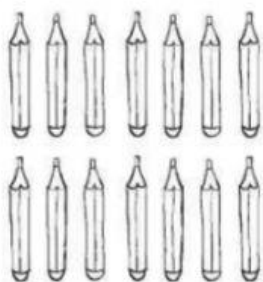




CONFRONTA



1 OSSERVA E COMPLETA .



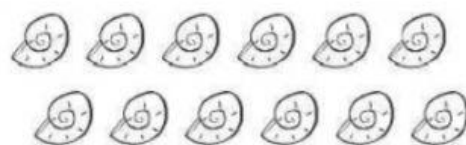
$14 < \underline{\quad}$



$13 \square 11$



$12 = \underline{\quad}$



2 COMPLETA I CONFRONTI CON $>$, $<$ O $=$.

$16 \square 17$

$20 \square 11$

$16 \square 17$

$10 \square 20$

$0 \square 11$

$13 \square 13$

$13 \square 19$

$7 \square 7$

$9 \square 15$

3 IN OGNI GRUPPO SCEGLI IL NUMERO MINORE.



4 IN OGNI GRUPPO SCEGLI IL NUMERO MAGGIORE.

