
























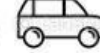





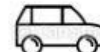


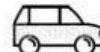



# IDEOGRAMMA

Il seguente ideogramma rappresenta la produzione di automobili di una fabbrica negli ultimi 6 anni.

2016	     
2017	   
2018	     
2019	      
2020	    
2021	       

- Completa la tabella della produzione annuale osservando la legenda e poi rispondi alle domande



= 50 auto



= 25 auto



= 15 auto

2016	2017	2018	2019	2020	2021
.....	.....	.....	.....	.....	.....

In quale anno la fabbrica ha prodotto più macchine?

.....

In quale anno la fabbrica ha prodotto meno macchine?

.....