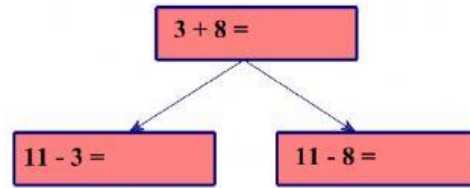
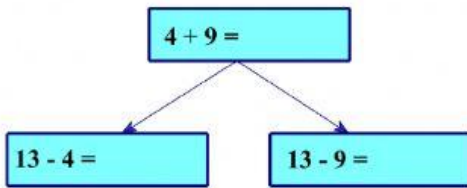
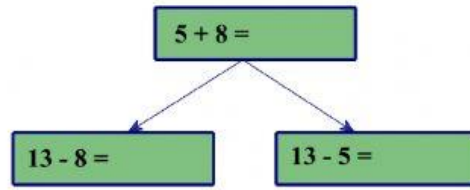
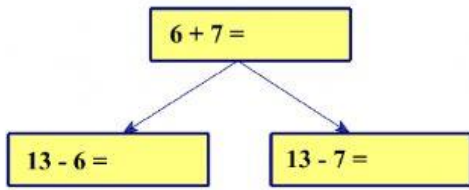


Bảng trừ 13

Bài 1. Số?



Bài 2. Tính (theo mẫu):

-	13	13	13	13	13	13
	9	8	7	6	5	4
	4					

Bài 3. Điền: Đ/S vào ô trống

Đ, S ?

$13 - 6 = 7$

$12 - 5 = 8$


$12 - 7 > 4$

$12 - 8 = 3$

$13 - 8 = 5$

$13 - 9 < 4$

Bài 4. Số?

Xuất phát 	$12 - 7 =$ <input type="checkbox"/>	$13 - 8 =$ <input type="checkbox"/>
$12 - 5 =$ <input type="checkbox"/>	$13 - 9 =$ <input type="checkbox"/>	$11 - 6 =$ <input type="checkbox"/>
$13 - 7 =$ <input type="checkbox"/>	$13 - 6 =$ <input type="checkbox"/>	$12 - 8 =$ <input type="checkbox"/>
Đích	$13 - 4 =$ <input type="checkbox"/>	$11 - 5 =$ <input type="checkbox"/>