

1. Look at the sign in front of the shop.



Who can go into the shop?

1. Kong, who is wearing a mask.
2. Dave, who has short hair.
3. Naree, who is wearing earrings.
4. Mana, who has eyeglasses.

2. Look at the picture.



Which of the following is correct?

1. Girls are cooking lunch.
2. Boys are doing homework.
3. Students are cleaning the room.
4. Children are washing their hands.



3. Look at the picture.



Brian and his friends are playing beach volleyball in England. Which season is it most likely to be?

1. Winter

2. Summer

3. Autumn

4. Spring

4. Look at the picture.



A boy fell into the swimming pool. He cannot swim. He's shouting,

“ _____ ”

1. See me!

2. See you!

3. Help me!

4. Help you!



5. On what holiday does Sue give this card to her best friend?



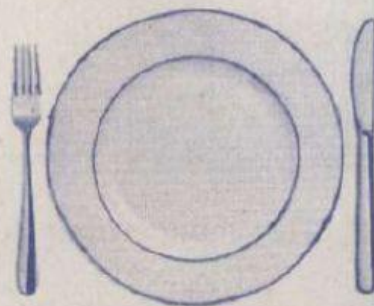
1. Easter

2. Christmas

3. Halloween

4. Thanksgiving

6. At a restaurant, Megan is waiting for her order. The waitress gave her knife and fork. Which food did she order?



1. Beef steak

2. Fried rice

3. Green curry

4. Mushroom soup

7. Read the sentence.

All students study Thai on Monday.

Which table is correct?

1.

| Monday | | | | |
|--------|---------|------|------|---------|
| | English | Math | Thai | Science |
| Liam | ✓ | ✓ | ✓ | ✓ |
| Noah | ✓ | | ✓ | |
| James | ✓ | ✓ | | ✓ |
| Sarah | ✓ | ✓ | ✓ | ✓ |
| Mike | ✓ | ✓ | ✓ | ✓ |
| Pete | ✓ | ✓ | | ✓ |

2.

| Monday | | | | |
|--------|---------|------|------|---------|
| | English | Math | Thai | Science |
| Liam | ✓ | ✓ | ✓ | ✓ |
| Noah | ✓ | ✓ | ✓ | |
| James | | ✓ | | ✓ |
| Sarah | ✓ | ✓ | ✓ | ✓ |
| Mike | ✓ | ✓ | ✓ | |
| Pete | | ✓ | ✓ | ✓ |

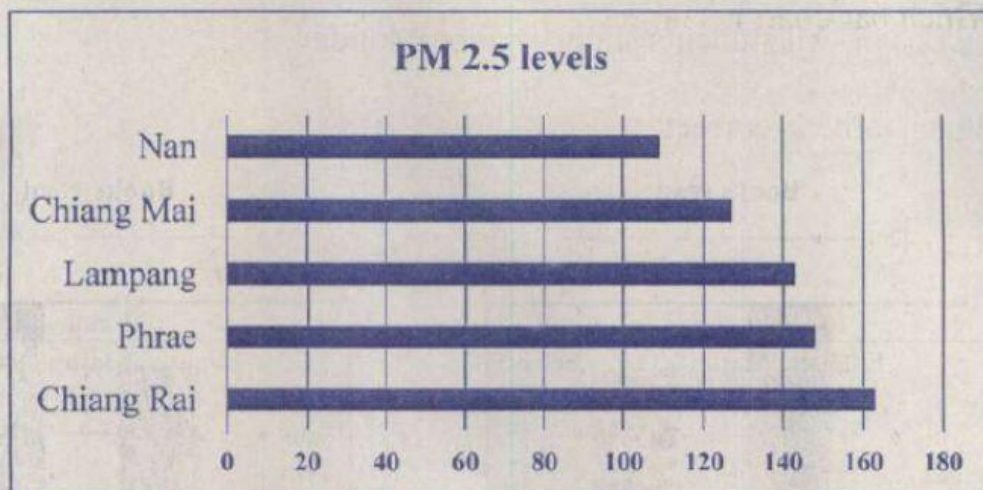
3.

| Monday | | | | |
|--------|---------|------|------|---------|
| | English | Math | Thai | Science |
| Liam | ✓ | ✓ | ✓ | |
| Noah | | ✓ | ✓ | ✓ |
| James | ✓ | ✓ | ✓ | ✓ |
| Sarah | ✓ | | ✓ | |
| Mike | | ✓ | ✓ | ✓ |
| Pete | ✓ | ✓ | ✓ | ✓ |

4.

| Monday | | | | |
|--------|---------|------|------|---------|
| | English | Math | Thai | Science |
| Liam | ✓ | ✓ | | ✓ |
| Noah | ✓ | | | ✓ |
| James | | ✓ | ✓ | ✓ |
| Sarah | ✓ | | ✓ | ✓ |
| Mike | | ✓ | ✓ | ✓ |
| Pete | ✓ | ✓ | ✓ | ✓ |

8. Look at the graph.



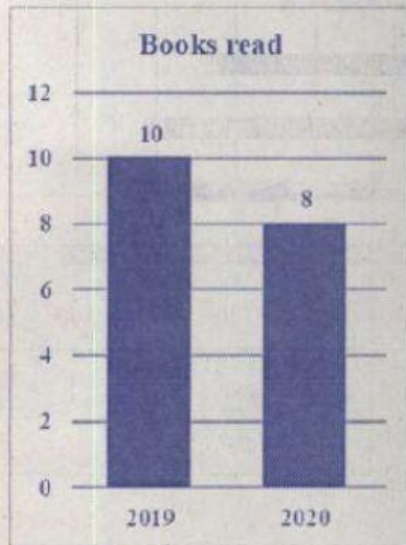
Which city has the highest PM 2.5 level?

1. Nan
2. Lampang
3. Chiang Mai
4. Chiang Rai

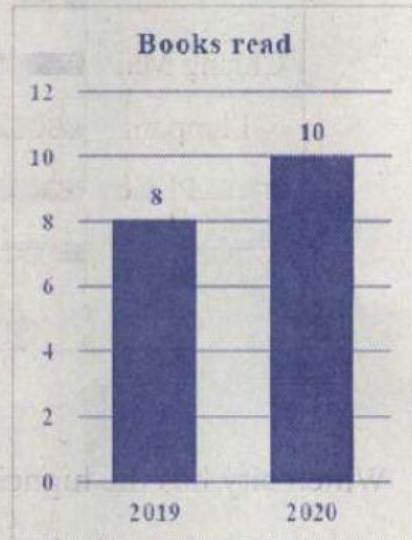
9. In 2020 Suda read ten books. She read two more books than 2019.

Which bar chart is correct?

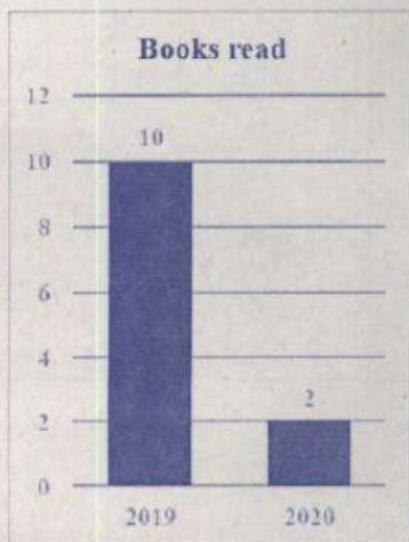
1.



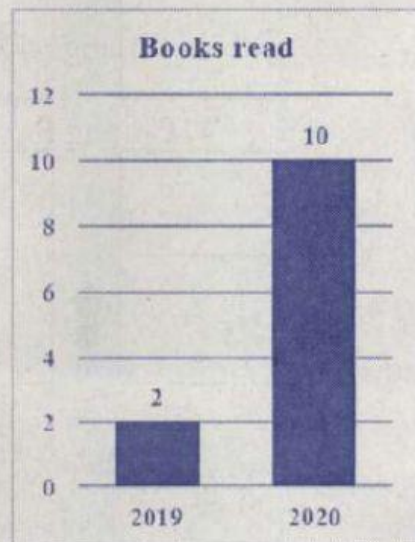
2.



3.



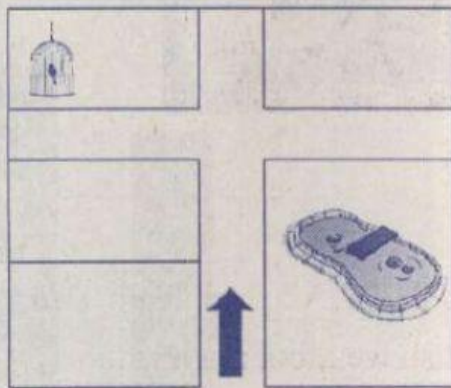
4.



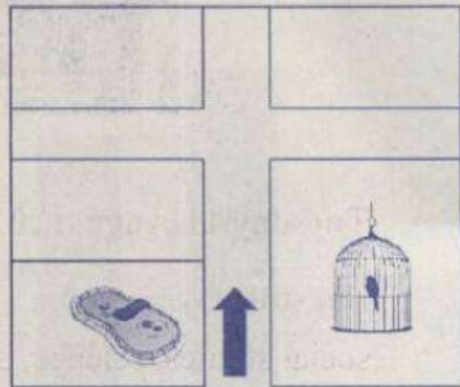
10. Jane goes into the zoo. She walks past the pond. Then, she turns left and walks about 50 metres. The bird cage is on her right.

Which map is correct?

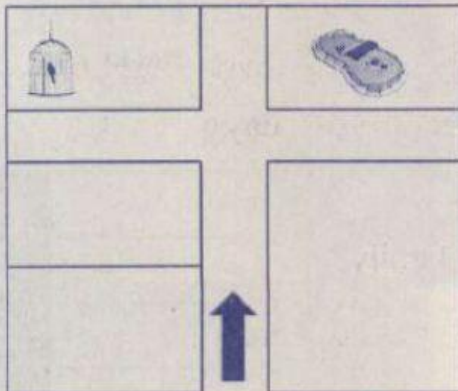
1.



2.



3.



4.

