

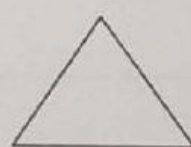


TERM 1

TEST 1 - NUMBER

No.	Question
1.	Write in the missing numbers 100 _____ , 102 , _____ 104 299 _____ , _____ , 302
2.	Arrange the numbers from Largest to Smallest 424, 434, 443, 432 _____
3.	I am the number that comes before 139 and after 137. What number am I? _____
4.	What is the value of the underlined digit ? <u>5</u> 6 _____ <u>7</u> 69 _____ 4 <u>3</u> 2 _____
5.	Write in words 48 _____ 985 _____ _____ 804 _____

No.	Question						
6.	<p>Write the numeral for:</p> <p>Forty-five _____</p> <p>Five hundred and ten _____</p> <p>Seven hundred and fifty- four _____</p>						
7.	<p>What is the LARGEST number that can be formed with the digits: 428?</p> <p>Answer _____</p>						
8.	<p>Write the digits in the appropriate column: 496</p> <table border="1" style="margin: 10px auto;"> <thead> <tr> <th>Hundreds</th> <th>Tens</th> <th>Ones</th> </tr> </thead> <tbody> <tr> <td style="height: 30px;"></td> <td style="height: 30px;"></td> <td style="height: 30px;"></td> </tr> </tbody> </table>	Hundreds	Tens	Ones			
Hundreds	Tens	Ones					
9.	<p>Fill in the boxes:</p> <p>265 = $(2 \times [\quad]) + ([\quad] \times 10) + (5 \times 1)$</p>						
10.	<p>Write in the boxes how many corners and sides there are in each shape.</p> <div style="display: flex; justify-content: space-around; align-items: flex-start; margin-top: 20px;"> <div style="text-align: center;">  <div style="margin-top: 10px;"> _____ _____ </div> </div> <div style="text-align: center;">  <div style="margin-top: 10px;"> _____ _____ </div> </div> <div style="text-align: center;">  <div style="margin-top: 10px;"> _____ _____ </div> </div> </div>						