

Trường Tiểu học Đống Đa

Tên: Lớp:

Môn Toán

LUYỆN TẬP

Bài 1: Tính:

$8 + 2 =$

$10 - 5 =$

$0 + 2 =$

$7 - 3 =$

$3 + 2 =$



$4 - 4 =$

$6 + 0 - 5 =$

$9 - 7 - 1 =$

$10 - 6 + 5 =$

Bài 2: Nói

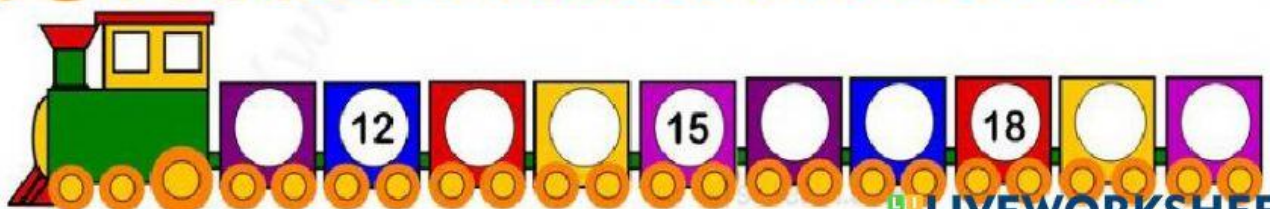
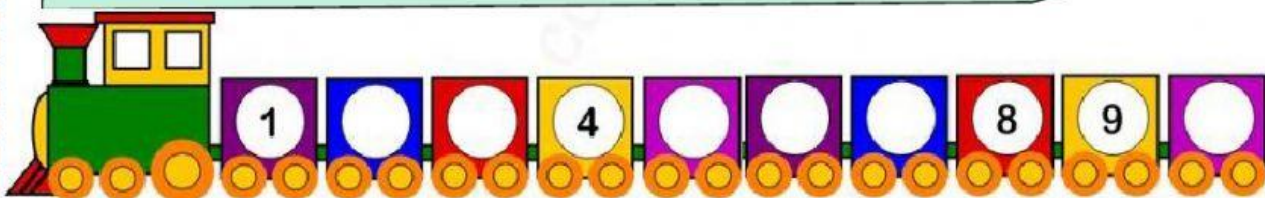


$6 - 2$


$5 - 3$


$4 - 3$


Bài 3: Điền số thích hợp vào ô trống:





Bài 4: Đánh dấu ✓ vào ô đúng:


	13	15
--	----	----


	12	14
--	----	----


	10	13
--	----	----

	14	16
--	----	----

	18	20
--	----	----

	17	19
--	----	----

	19	20
--	----	----

	16	17
--	----	----