

Numbers by Tens


A. Vocabulary

ten 10	twenty 20	thirty 30	forty 40	fifty 50
sixty 60	seventy 70	eighty 80	ninety 90	one hundred 100

B. Practice

1.  Match.



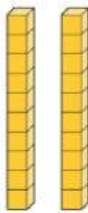
2.  Write missing **letters**.



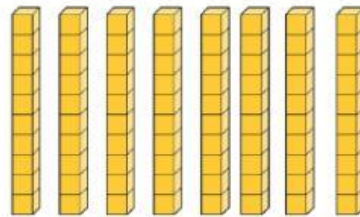


Count. Then write the **number**.

3.



4.



5.



Circle the correct answer.

Sophie has **ten** apples.

John has **thirty** apples.

a. Which **number** shows the apples of Sophie?

A. 100

B. 30

C. 10

b. Who has **more** apples?

A. Sophie

B. John