





















Pumpkin Harvest	
Name	Number of Pumpkins
Danny	   
Jacob	 
Ray	    
Edwin	    
Alex	   

Key:  = 3

- Who has 6 pumpkins? _____
- Alex has _____ pumpkins.
- How many more pumpkins does Danny have more than Jacob? _____
- Who has the least amount of pumpkins? _____
- Ray and Edwin both have _____ pumpkins each.
- How many more pumpkins does Ray have than Edwin?
_____.