





Which values complete the properties of each set of waves?

	number of waves	time (s)	frequency (Hz)
A. 	2	<input data-bbox="954 291 1136 369" type="text" value="?"/>	2
B. 	<input data-bbox="651 414 833 492" type="text" value="?"/>	5	2
C. 	1	2	<input data-bbox="1257 526 1439 604" type="text" value="?"/>
D. 	6	<input data-bbox="954 638 1136 716" type="text" value="?"/>	3

10

1

3

4

0.5

5

2

?