

Name: _____

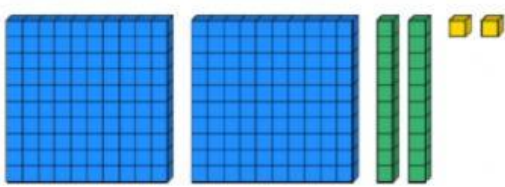
Date: _____

Subject: **M**athematics

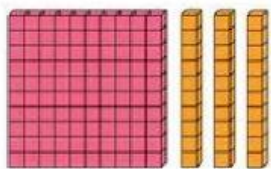
Topic: **E**xpanded Form

Activity A

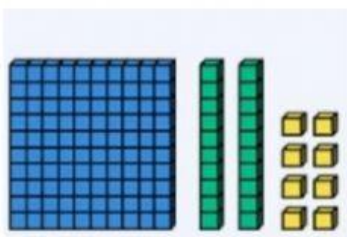
Write the expanded form for each.

1. 


$$\square + \square + \square = \square$$

2. 

$$\square + \square + \square = \square$$

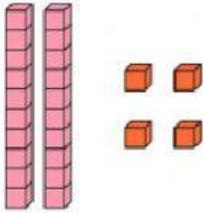
3. 

$$\square + \square + \square = \square$$



4.

$$\square + \square + \square = \square$$



5.

$$\square + \square = \square$$

Activity B

Which number is expanded?

$$800 + 0 + 7 = \square$$

$$500 + 10 + 4 = \square$$

$$70 + 3 = \square$$

$$10 + 8 = \square$$

$$400 + 90 + 5 = \square$$