



Year 2 Science
(Week 2)

Review worksheet – Scientific Observation & Non-standard measurements

Name: _____

Class: Year 2 A B C D







Date: _____





1. Which of the following observations makes a good Scientific observation? It is important that you **do not use your opinion** to observe. **Observations should be:** **Use your senses:**

scientific
specific
measured
quantitative

sight
hearing
smell*
touch*
taste*

**when appropriate*

The plant looks pretty.	
The pot is heavy.	
The leaves on the plant began turning yellow on March 10th, 2017.	
I don't like the colour of the flower.	
The roots had grown by 1cm.	
The flower has 7 soft petals and 2 green leaves.	

The length of the leaf is 3cm.	
The soil felt gross.	
The plant weighs 1kg.	
The stem on the plant is weird.	

Scientific observation	Unscientific observation

2. Answer the following non-standard measurements.

How many **paper clips** long is the pen?



4

5

How many **baseballs** long is the bat?



4

5

How many **batteries** long is the remote?



4

5

How many **bobby pins** long is the comb?



3


4

Fill in the missing number.



The fish is starfish long.

Fill in the missing number.



The leaf is ladybugs long.