


# KG.3 Art Assessment

Part 1. Click the letter of the correct answer.


10

1. Which shape has 4 sides?


a.



b.



c.



2. What picture is it?



a. clock

b. cargo ship

c. car

3. How many colours does a rainbow have?

a. 5

b. 6

c. 7

4. What picture is it?



a. alarm clock

b. house

c. ship

5. Which of the following is a zigzag line?

a.



b.



c.



Part 2. Click the letter of the correct answer.

6. What picture is it?



a. helicopter

b. car

c. cargo ship


7. Which is the picture of a lamp-shade?



8. Which is the picture of a house?



9. Which object has a star shape?



10. What shape do this object have?

