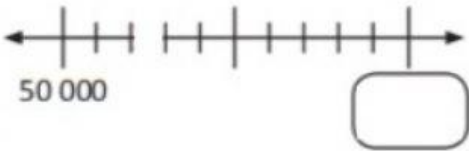

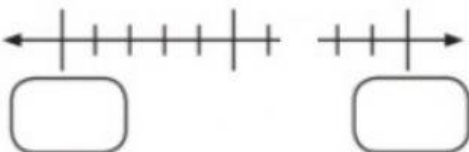


7. For each of the following, look at the digits in the **ten thousands** place. Then, fill in the blanks.

- (a) 12 850 falls between 10 000 and _____.
- (b) 67 316 falls between _____ and _____.
- (c) 398 180 falls between _____ and _____.
- (d) 501 793 falls between _____ and _____.
- (e) 6 739 464 falls between _____ and _____.

8. Fill in the boxes on the number line.

Mark each number in the table with a cross (X) on the number line.
Round off each number to the nearest ten thousand.

Number	Number Line	Rounded Off to the Nearest Ten Thousand
52 500		52 500 ≈ _____
795 000		795 000 ≈ _____
2 107 000		2 107 000 ≈ _____