



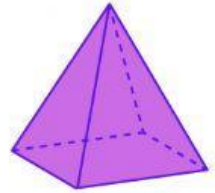
# MATHEMATICS 3D SHAPES

Choose the solid that match the given characteristic.

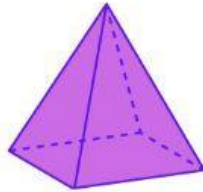

1. I have six faces that are the same.

☐☐☐


2. I have no flat faces.

☐☐☐

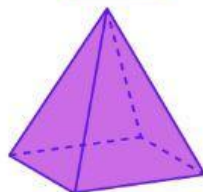
3. I have one point.

☐☐☐

4. I have 2 flat faces.

☐☐☐

5. I have no vertices.

☐☐☐