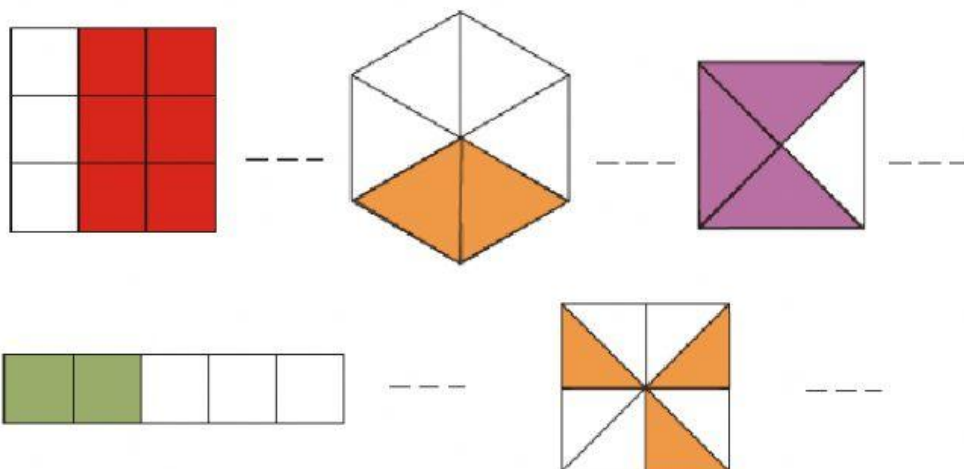
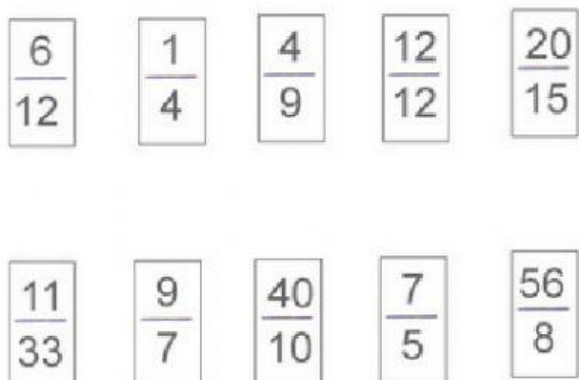


1) Scrivi la frazione che rappresenta la parte colorata.



2) Colora di rosso le frazioni proprie, di verde quelle improprie e di giallo quelle apparenti.
Infine circonda con il viola la frazione decimale.



3) Completa le frasi.

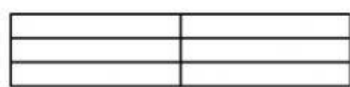
Frazionare significa _____

Fai un esempio di unità frazionaria: -----

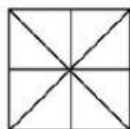
Il numeratore indica _____

Il denominatore indica _____

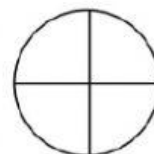
4) **Colora le parti indicate da ogni frazione propria**



$\frac{5}{6}$




$\frac{3}{8}$

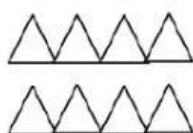


$\frac{1}{4}$

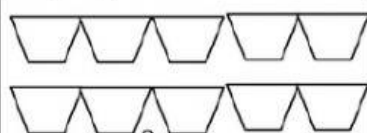
Colora le parti indicate da ogni frazione impropria



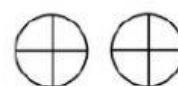
$\frac{5}{3}$



$\frac{7}{4}$



$\frac{8}{5}$



$\frac{9}{4}$

VALUTAZIONE: ___/10 FIRMA: _____