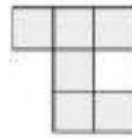
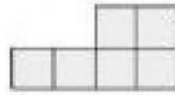
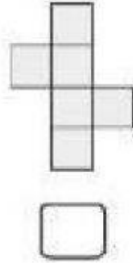


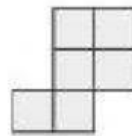
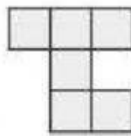
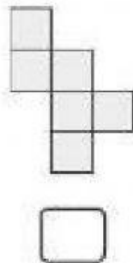
NETS OF A CUBE

1. Write 'yes' if the nets can be folded into a cube.

(a)



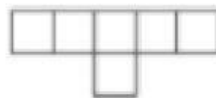
(b)



2. Write which nets can be folded to a cube.



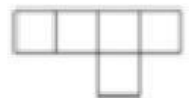
a.



b.



c.



d.

The nets of a cube are _____