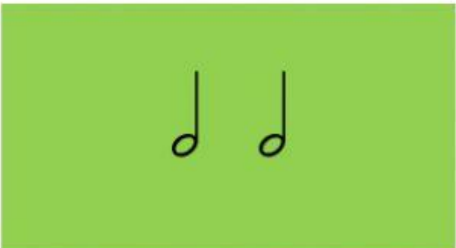



Choisis le bon chiffre indicateur.


$\frac{2}{4}$    $\frac{4}{4}$


$\frac{3}{4}$    $\frac{4}{4}$

$\frac{3}{4}$    $\frac{4}{4}$

$\frac{2}{4}$    $\frac{3}{4}$

$\frac{3}{4}$    $\frac{4}{4}$

$\frac{2}{4}$    $\frac{4}{4}$

$\frac{3}{4}$    $\frac{4}{4}$

$\frac{3}{4}$    $\frac{4}{4}$

$\frac{3}{4}$    $\frac{4}{4}$

$\frac{2}{4}$    $\frac{3}{4}$