


Name: \_\_\_\_\_

Date: \_\_\_\_\_

## Measuring Mass in Grams


1 Complete.



The mass of the stapler is \_\_\_\_\_ g.


2 Complete.

(a)




The mass of the correction tape is \_\_\_\_\_ g.

(b)



The mass of the bottle of salt is \_\_\_\_\_ g.

(c)




The mass of the cherries is \_\_\_\_\_ g.

(d)



The mass of the orange is \_\_\_\_\_ g.

3 Look at the picture.



What could the mass of each box be?

Are there other answers?  
Why do you think so?



How do you do your worksheet?

(write A, B, or C)



A. I can do the worksheet  
by myself



B. I need a little help



C. I need a lot of help