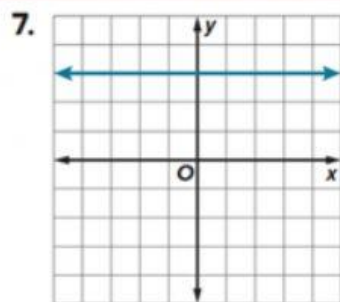
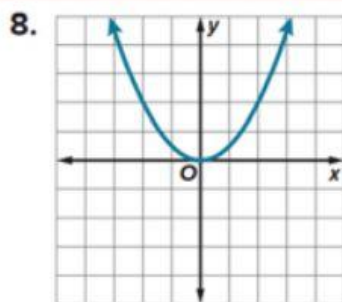


Name: _____

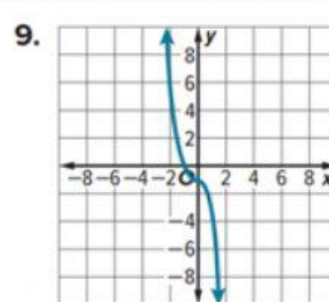
Determine whether each function is *one-to-one*, *onto*, *both*, or *neither*.



- A. one-to-one
- B. Onto
- C. Both
- D. Neither



- A. one-to-one
- B. Onto
- C. Both
- D. Neither



- A. one-to-one
- B. Onto
- C. Both
- D. Neither