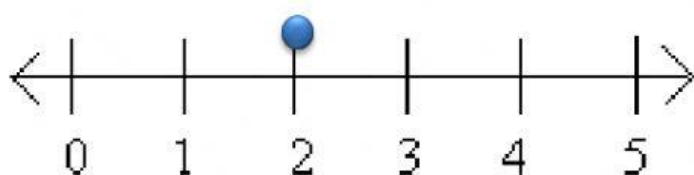


Mrs. Gabbie owns a bakery. Her bakery is well-known for its high quality delicious pastries.

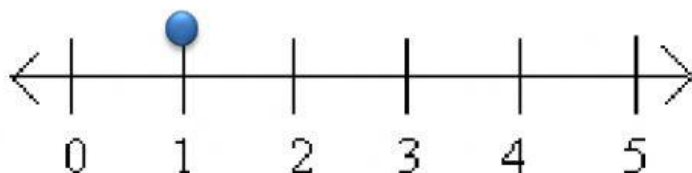


Complete the word sums using the number lines:

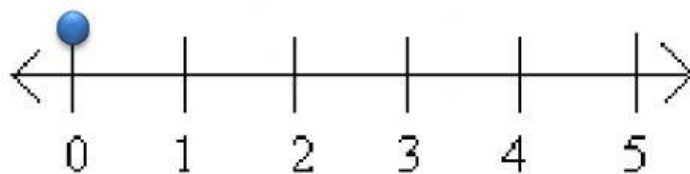
- a) There are 2 bakers and 2 bakery cashiers working in Mrs. Gabbie's bakery. How many staff members are working there?



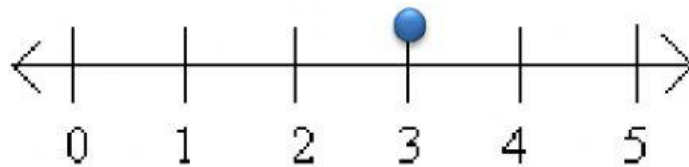
- b) In the bakery storage room, there is 1 sack of flour and 3 sacks of sugar. How many sacks are there in the storage room?



- c) Mrs. Gabbie served 0 trays of cheese breads, and 3 trays of garlic breads for her family reunion. How many trays of bread were there altogether?



- d) There are 3 different flavours of doughnuts and 2 different flavours of pretzels displayed in her bakery. How many different flavours are there in that bakery?



- e) One customer bought 3 strawberry cakes from Mrs. Gabbie's bakery. She was amazed by the taste of the cake, so the following day she bought another 1 strawberry cake. How many strawberry cakes did Mrs. Gabbie sell to that customer?

