

Homework 1/05/22

## Reading Homework:

### Carolyn's Cat

By Constance Kling Levy

1. She's a house cat
2. pampered like a child,
3. cuddled and petted
4. and very well fed,
5. a stranger
6. to the wild
7. outside.
8. (She's the kind of cat
9. you'd invite to tea.)
10. Her life, it seems,
11. is peaceful and good
12. with only her house
13. for a neighborhood:
14. the plump pillows,
15. the soft chairs,
16. the smooth wood.
17. But I saw her one night



18. posed perfectly still,  
19. like a china cat,  
20. on the windowsill,  
21. meeting, with moonlight eyes,  
22. the full moon's glow.

23. And I think  
24. there are things  
25. about Carolyn's cat  
26. that even Carolyn  
27. doesn't know

1. Based on stanza 3, the reader can infer that the cat -

- A. is not real.
- B. is longing to go outside.
- C. has lived outdoors before.
- D. only comes out at night.

2. After reading the poem, the reader can conclude that -

- A. Carolyn does not take care of her cat.
- B. Carolyn does not know what her cat does at night.
- C. Carolyn collects cats made of china.
- D. Carolyn takes in cats from the wild.

## Writing Homework:

**Directions:** Choose the word that best completes the sentence.

- 1.) I took the flowers thankful/thankfully.
- 2.) The food at the restaurant is extreme/extremely delicious.
- 3.) Is Joe serious/seriously ill?
- 4.) Could you please shut the door quiet/quietly?
- 5.) The woman is a very successful/successfully doctor.

## Math Homework:

1. Solve for the product of 67 and 40.

a. 1,680

b. 1,960

c. 2,650

d. 2,680

2. Solve for the quotient of 459 and 5.


a. 91 R4

b. 454

c. 94 R2

d. 91

3. The model is shaded to represent one whole.




Model 1 and Model 2 have each been shaded to represent a decimal.

Model 1



Model 2



What is the sum between the decimals shaded in Model 1 and Model 2?

a. 0.4

b. 0.8

c. 1.2

d. 0.6

## Virginia Studies:

Move the boxes to the correct places in the chart.

Names of Places Reflecting the English Culture	Names of Places Reflecting the American Indian Culture

Hampton

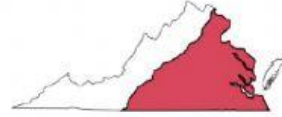
Poquoson

Roanoke

Richmond

© Alyssa Tschetter

Look at the map. Which two groups of people lived mainly in the shaded region?



English & other Europeans

Germans

Australians

Africans

© Alyssa Tschetter

## Science Homework:

2. Name the planets in order based on their distance from the sun.

- a. Mars, Venus, Earth, Mercury, Neptune, Uranus, Saturn, Jupiter
- b. Mercury, Venus, Earth, Mars, Jupiter, Saturn, Uranus, Neptune
- c. Mars, Mercury, Earth, Venus, Saturn, Jupiter, Uranus, Neptune
- d. Mercury, Mars, Earth, Venus, Jupiter, Saturn, Neptune, Uranus

4. Which of these is not an Outer Planet?

- a. Jupiter
- b. Mars
- c. Saturn
- d. Uranus