

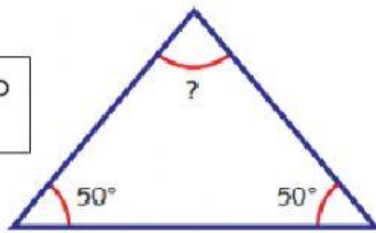
# HOMework MATHS WEEK 18

NAME:

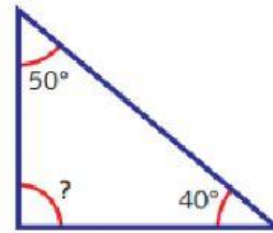
CLASS:

2 What is the size of each missing angle? Do not use a protractor.

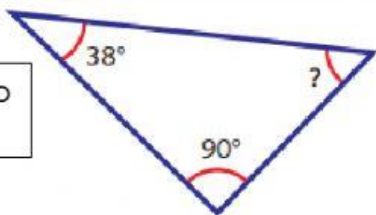
a)




b)



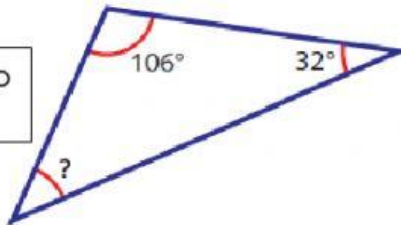
c)



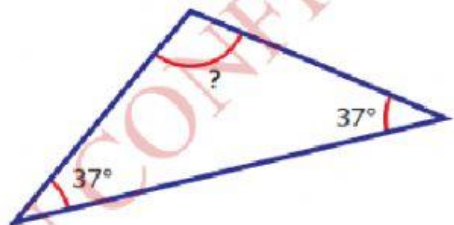
d)



e)



f)

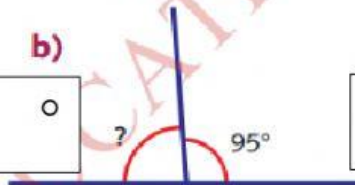


3 Calculate the missing angles. Do not use a protractor.

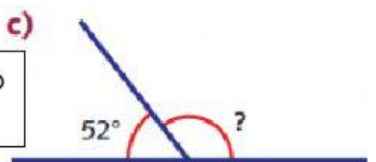
a)



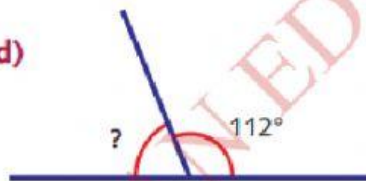
b)




c)



d)



e)



# **HOMEWORK MATHS WEEK 18**

**NAME:**

**CLASS:**

**2** Measure the angles of these triangles. Check that they each total  $180^\circ$ .

