

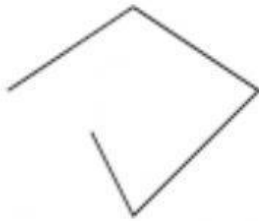
# Polygons



Which of the following shapes are polygons?

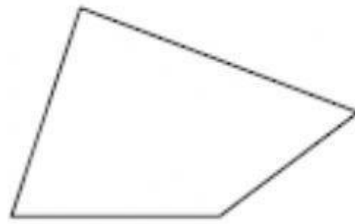
Write YES OR NO.

1)



-----

2)



-----

3)



-----

4)




-----

5)



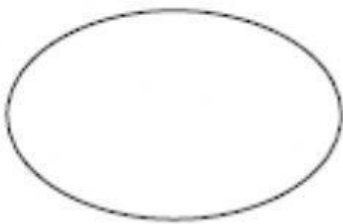
-----

6)



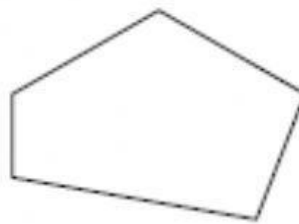
-----

7)



-----

8)



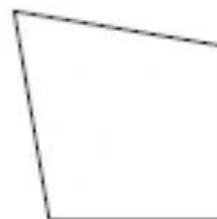
-----

9)



-----

10)



-----