

## ĐỀ CƯƠNG ÔN TẬP SCIENCE GRADE 2 – CLASS 2A5

1. Which one of these made of Rubber ?



2. Is this **man – made** or **natural material**

A. Man-made

B. Natural materials



3. Is this man-made or natural materials ?



A. Man-made

B. Natural materials

4. What does **soil** have it it ?

a. Candy

b. Rock

c. Tree

5. Which of these things made of **plastic** ?



6. Is this man-made or natural materials ?



a. Man-made

b. Natural materials

7. Which of these things made of **plastic** ?



8. What are **diamonds** used for ?

a. Eating

b. jewellery

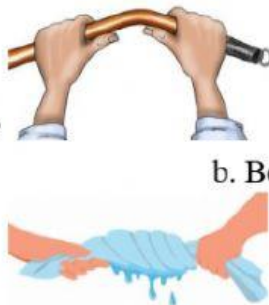
c. making clothes

9. What is it ?

a. Stretch

b. Bend

c. Squash




10. What is it ?

a. Stretch

b. Twist

c. Squash




11. Is this man-made or natural – materials ?

a. Man-made

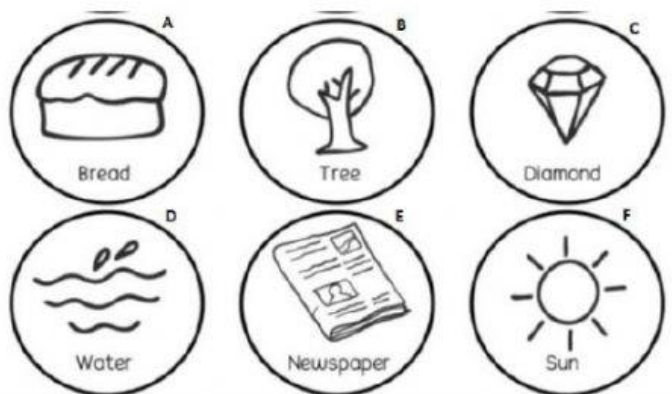
b. Natural materials



16. What animal live in the **dry place** ?



17. Which pictures are **man-made** ?



a. Pictures C and D

b. Pictures F, D, B

c. Pictures A, E

18. An Iphone is man - made or natural materials ?

a. Natural materials

b. Man- made

19. Which one is **sewage** ?



20. What weather is it ?



a. Sunny

b. Windy

c. Storm