



Cambridge Primary Programme



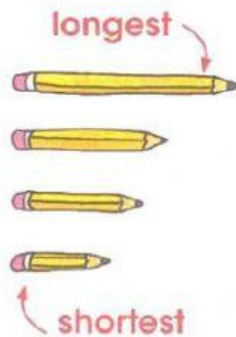
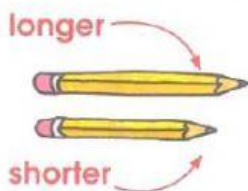
CAMBRIDGE PRIMARY MATHEMATICS 1

MEASURING LENGTH AND HEIGHT

Name: _____

Date: _____

Class: _____





1. Look and choose.

a.

Which is shorter?




b.

Which is taller?



c.

Which is longer?




d.

Which is shorter?



e.

Which is longer?




f.

Which is taller?



2. Read and tick the box.



a. Which is the LONGEST?

☐☐☐

b. Which is the SHORTEST?

☐☐☐☐

c. Which is the TALLEST?

☐☐☐☐