


4. The  card is the number pair to 25. What number is on the other side of the card?

A. 8

B. 10

C. 15



5. How do you write 100 in words?

A. one ten

B. one zero

C. one hundred

6. What number is seventeen?

A. 47

B. 17

C. 57

7. Look, count and label this:

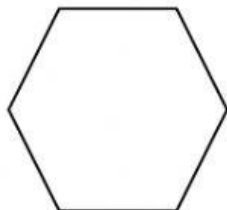


A. $2+2+2$

B. $10+2$

C. $10+10$

8. Is it an octagon ?

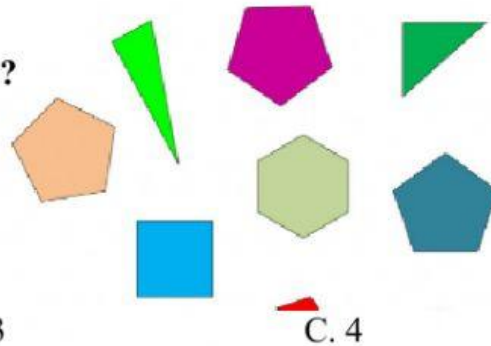


A. Yes, it is.

B. Yes, it isn't.

C. No, it isn't.

9. How many pentagons are there ?

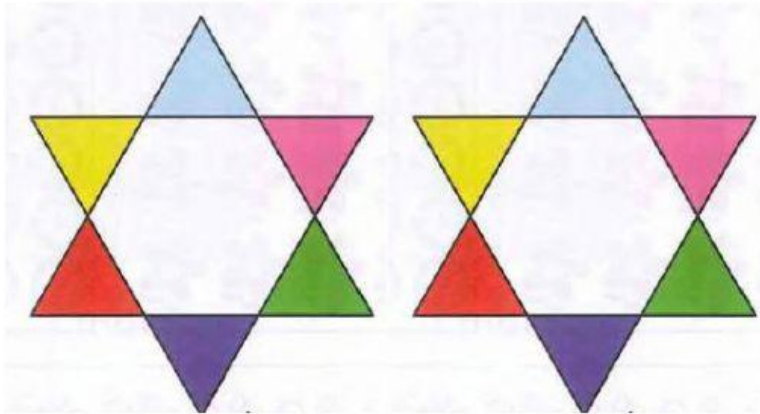


A. 2

B. 3

C. 4

10. How many hexagons are there ?



A. 2

B. 4

C. 1

11. A triangle has 3 sides . How many sides are there on 5 triangles ?

A. 18

B. 15

C. 12

12. How many legs do 3 dogs have?



A. 10

B. 12

C. 20

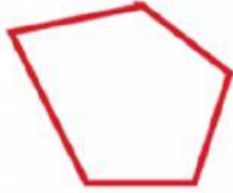
19. How many sides does a hexagon have?

A. 3

B. 4

C. 6

20. C is an irregular shape. True or False?



A.



B



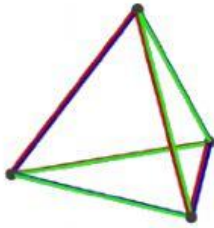
C.

A. False

B. True

C. True and False

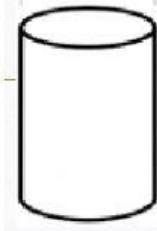
21. A is a tetrahedron. TRUE OR FALSE?



A.



B



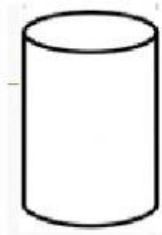
C.

A. False

B. True

C. True and False

22. It's a cylinder. True or false?



A. False

B. True

C. True and False

23. Which number is nineteen?

A. 9

B. 19

C. 90

