






Nickname:

Grade 3/1



Part 1: Write the total value of the money given.

	baht	satang
	baht	satang
	baht	satang
	baht	satang
	baht	satang

Part 2: Write the amount of money in decimal form.

Amount	Decimal Form
20 baht 50 satang	20.50 baht
150 baht 75 satang	baht
257 baht 25 satang	baht
21 baht 25 satang	baht
187 baht 50 satang	baht
522 baht 75 satang	baht

Part 3: Select whether the action is either income or expense.

I buy some snacks for 20 baht.	income	expense
Grandma gives me 1,000 baht.	income	expense
I buy a pack of juice for my friends.	income	expense
I sell my toys for 210 baht.	income	expense
I buy some ice cream for 50 baht.	income	expense

Part 4: Arrange the following in an ascending order (smallest to biggest).



1 smallest	2	3	4	5 greatest
---------------	---	---	---	---------------



1 smallest	2	3	4	5	6 greatest
---------------	---	---	---	---	---------------