

Estudante:

1ª. Observe o número que cada criança segura, faça o cálculo mental e marque a operação correta:



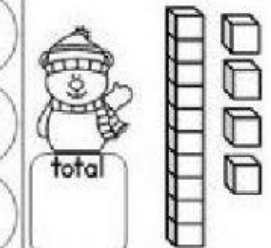
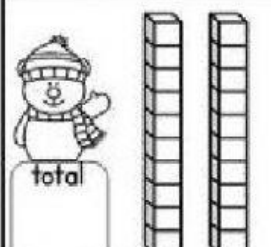
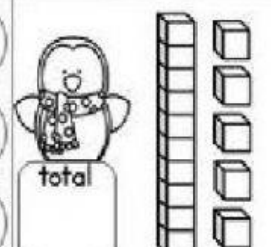
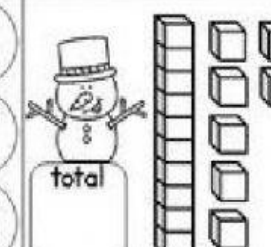


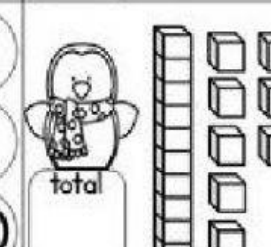
	$3 + 4$
	$8 - 3$
	$2 + 4$

	$2 + 5$
	$7 - 3$
	$1 + 5$









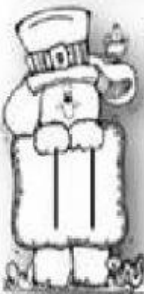









	$9 - 2$
	$4 + 5$
	$8 - 0$

	$7 - 2$
	$3 + 6$
	$10 - 2$

2ª. Observe o material dourado, marque a quantidade representada e escreva o seu total:

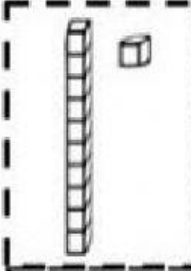
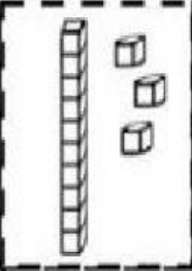



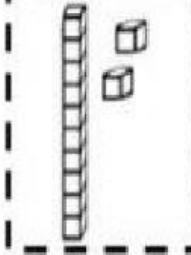
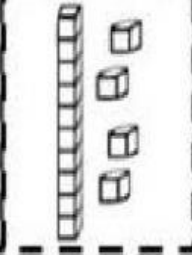
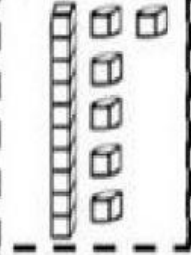
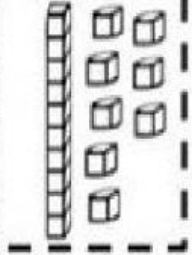
 total	$\textcircled{14}$ $\textcircled{15}$ $\textcircled{13}$	 total	$\textcircled{12}$ $\textcircled{13}$ $\textcircled{11}$	 total	$\textcircled{15}$ $\textcircled{14}$ $\textcircled{16}$
 total	$\textcircled{18}$ $\textcircled{20}$ $\textcircled{19}$	 total	$\textcircled{15}$ $\textcircled{17}$ $\textcircled{16}$	 total	$\textcircled{16}$ $\textcircled{18}$ $\textcircled{17}$
 total	$\textcircled{16}$ $\textcircled{17}$ $\textcircled{15}$	 total	$\textcircled{18}$ $\textcircled{19}$ $\textcircled{20}$	 total	$\textcircled{17}$ $\textcircled{18}$ $\textcircled{16}$

3ª. Recorte e cole de acordo ao numeral representado:













					
					
					

©MissVindergarten

Scissors icon

4^ª. Vamos treinar antecessor e sucessor?

 72	 60	 9
 20	 89	 51
 17	 42	 36
 99	 29	 3