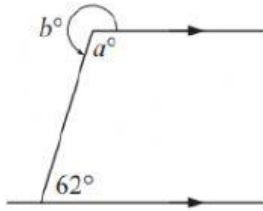


PARALLELISM

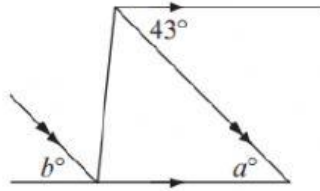
Find, giving brief reasons, the values of the unknowns in alphabetical order:

a



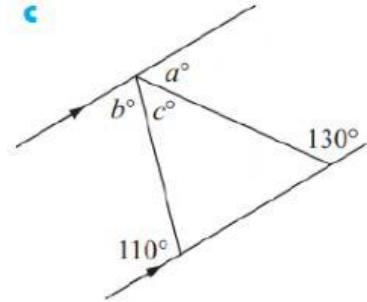
--	--

b



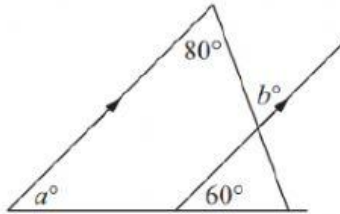
--	--

c



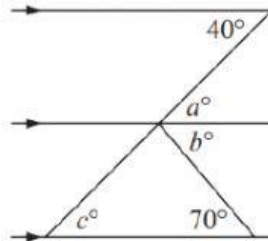
--	--	--

d



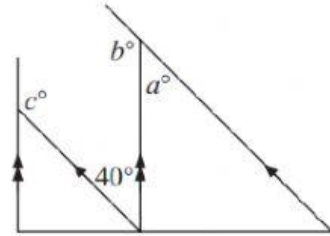
--	--

e



--	--	--

f



--	--	--

Working in alphabetical order, find the values of the unknowns.

Give a reason for each answer.

