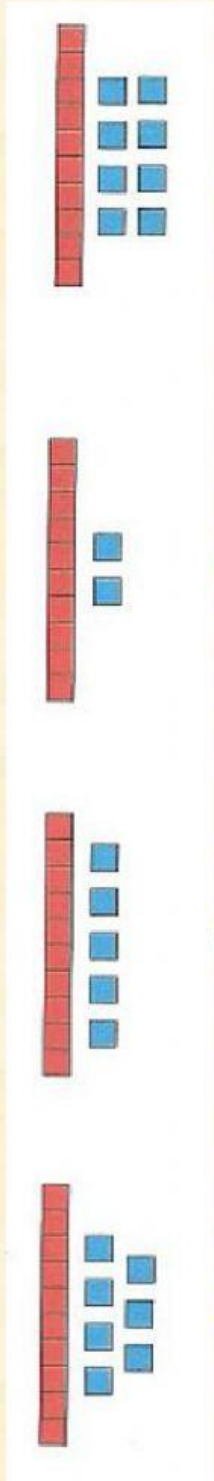


# Decenas y unidades hasta 19

## 1º de Primaria

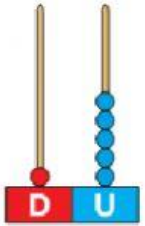


1. Mira y une.




- doce
- quince
- diecisiete
- dieciocho

## 2. Mira y completa.



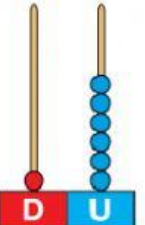
➤

D	U



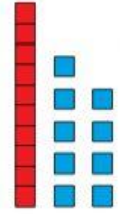
➤

D	U



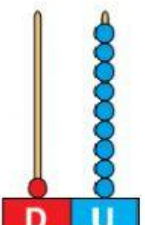
➤

D	U




➤

D	U



➤

D	U



➤

D	U

## 3. Mira y une.

17 ●

18 ●

16 ●

19 ●

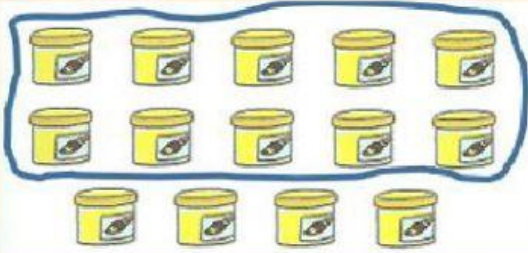
● 10 + 6

● 10 + 8

● 10 + 9

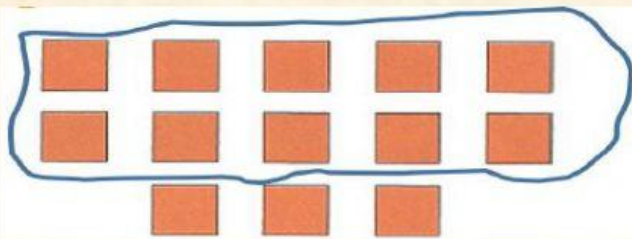
● 10 + 7

#### 4. Mira y completa.



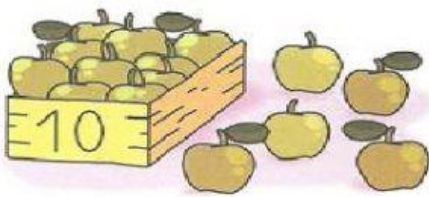
decena y  unidades

$$\square + \square = \square$$




decena y  unidades

$$\square + \square = \square$$



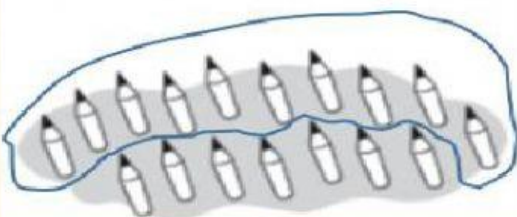
decena y  unidades

$$\square + \square = \square$$




decena y  unidades

$$\square + \square = \square$$




decena y  unidades

$$\square + \square = \square$$




decena y  unidades

$$\square + \square = \square$$



decena y  unidades

$$\square + \square = \square$$




decena y  unidades

$$\square + \square = \square$$



decena y  unidades

$$\square + \square = \square$$



decena y  unidades

$$\square + \square = \square$$