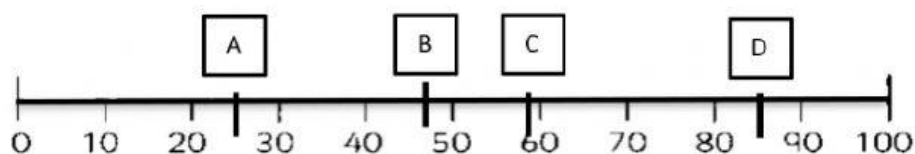


REVISION – SEMESTER I

MATHS Grade 2 (No.1)

1. Where is number 85?





- a. A b. B c. C d. D

2. What number is on the question mark '?' ?



- a. 9 b. 3 c. 7 d. 10



3. The  card is number pairs to 20. What number is on the other side of  card?

- a. 7 b. 8 c. 20 d. 13



4. The  card is number pairs to 30. What number is on the other side of  card?

- a. 20 b. 6 c. 5 d. 30



5. What is the equivalent of $36 - 6$?

- a. $23 + 4$ b. $22 + 9$ c. $22 + 8$ d. $13 + 6$

6. What is the equivalent of $39 + 2$?

a. $28 + 14$

b. $50 - 9$

c. $12 + 32$

d. $42 - 8$

7. What is 27 rounded to the nearest 10?

a. 15

b. 10

c. 20

d. 30

8. What is 75 rounded to the nearest 10?

a. 80

b. 90

c. 100

d. 86

9. Choose the correct answer:



A. 10×3

B. 5×2

C. $10 + 10$

D. 3×5

10. How many lines of symmetry?



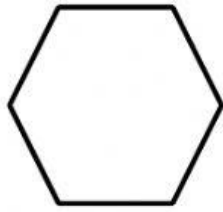
A. 4

B. 5

C. 10

D. 6

11. What shape is it?




A. Pentagon

B. Hexagon

C. Circle

D. Triangle

12. How many triangles are there?



A. 8

B. 4

C. 6

D. 10

13. A tricycle has 3 wheels. How many wheels are there on 4 tricycles?


A. 7

B. 6

C. 12

D. 1

14. Choose the correct answer:



A. 4×3

B. 10×4

C. $4 + 10$

D. 10×10

15. Find the equal of:

$$15 + 5 =$$

the equal of: bằng với

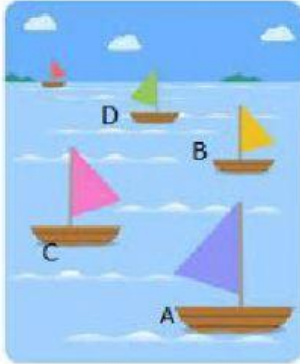
A. $10 + 5$

B. $5 + 20$

C. $10 + 10$

D. $20 - 10$

16. Which boat is the furthest? Circle the correct answer:




A.

B.

C.

D.

17. Which giraffe is the furthest? Circle the correct answer:



A.

B.

C.

D.

18. How long is the pencil?



- A. 7 centimeters B. 8 centimeters c. 9 centimeters

- a. Box A b. Box B c. Box A&B

19.

If Lucy is paid \$1 for every wheel she cleans, how many dollars does she get to clean five tricycles?

- a. 10 b. 15 c. 20

20. What equipment will you need to measure the length?

- a. Ruler b. pencil c. pen

There are 46 students in a class. 24 of them are girls. How many boys are there in the class?

21.

- a. 70 b. 22 c. 48

22. Jose keeps a football in the air within 1 minute

John keeps a football in the air within 30 seconds



Who keeps a football in the air longer? –

- a. Jose b. John c. both

23. What time is it?

- a. 2 o'clock
b. 12 o'clock
c. 3 o'clock



There are 28 .
14  fly away.
How many are left? _____

24.

- a. 12 b. 15 c. 14

25. Sam ran the race 12 seconds
Vicky ran the race 22 seconds
Who isn't the winner?
a. Sam b. Vicky c. both
26. Mary is 1,20m tall
Cherry is 125cm tall
Who is taller?
a. Mary b. Cherry c. both
27. Which was the best way to start a jump?
a. stand up b. sit down
c. bend your knee and push on your feet.
28. Jack jumped and touched my hand
John jumped and didn't touch my hand
Who managed to jump the highest? –
a. Jack b. John c. nobody
29. You have number 24. Should you round up or round down?
a. Round up b. round down
30. How many faces can you see?
a. 3 faces b. 12 faces c. 6 faces

